


Relaciona las fracciones




Gracias por descargar los ejercicios que Barrilito te comparte.
En nuestra página web encontrarás más recursos como este.

Este recurso descargable es gratuito. Prohibida su venta.



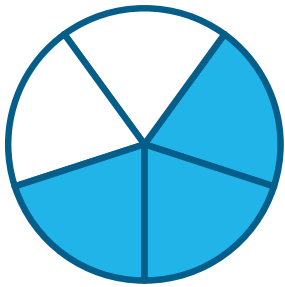
•

•

 $\frac{3}{5}$ 

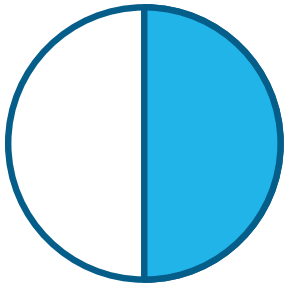
•

•

 $\frac{3}{8}$ 

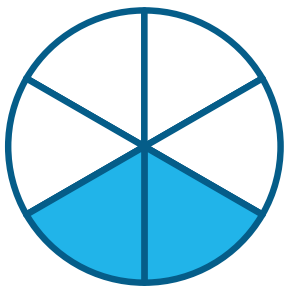
•

•

 $\frac{2}{6}$ 

•

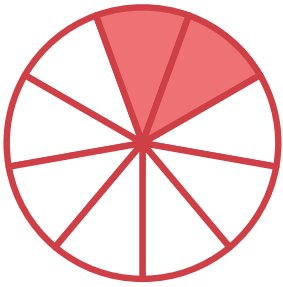
•

 $\frac{3}{4}$ 

•

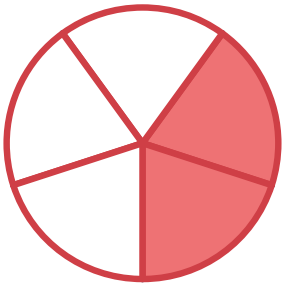
•

 $\frac{1}{2}$



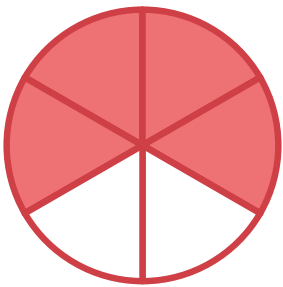
•

•

 $\frac{4}{6}$ 

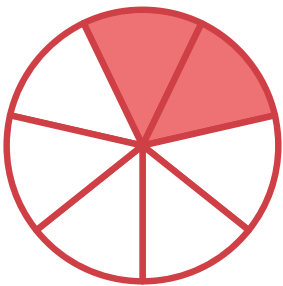
•

•

 $\frac{2}{7}$ 


•

•

 $\frac{2}{9}$ 

•

•

 $\frac{6}{8}$ 

•

•

 $\frac{2}{5}$